

Name: _____ Date: _____

Student Exploration: Circuits

Vocabulary: ammeter, circuit, current, ohmmeter, Ohm's law, parallel circuit, resistance, resistor, series circuit, voltage

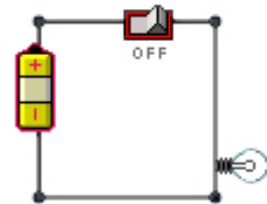
Prior Knowledge Questions (Do these BEFORE using the Gizmo.)

Strings of holiday lights can be designed in one of two ways. In some strings of lights, each light is connected to the others along a single wire (in series). In others, each light is attached to its own wire (in parallel).

1. Suppose a single light bulb burns out. How do you think this will affect lights that are strung along a single wire? _____
2. How will a single burned-out bulb affect the string of lights when each light is attached to its own wire? _____

Gizmo Warm-up

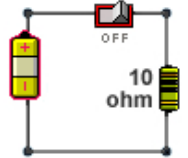
The *Circuits* Gizmo™ shows a circuit board on the right and a variety of components on the left. Create a **circuit** with a battery, a light switch, a wire, and a light bulb, as shown. (Click the light switch to turn it to **OFF**.)



1. Click the light switch to turn it to **ON**. What happens? _____

2. **Voltage** is a measure of how much power the battery has. Click on the battery and move the **Selected battery voltage** slider back and forth. How does the voltage affect the light bulb? _____

3. Turn on **Show current**. The arrows represent **current**, or flow of charge, in the circuit. How does changing the battery voltage affect the current? _____
4. Remove the wire. What happens? _____

Activity A: Ohm's law	<u>Get the Gizmo ready:</u> <ul style="list-style-type: none"> Click Clear. Create the circuit shown at right. (Use the 10 ohm resistor.) Click on the battery. Set the Selected battery voltage to 10 volts. 	
--	--	---

Introduction: **Resistors** are devices that slow the flow of current in a wire. The **resistance** of the circuit to current flow is measured in units called ohms.

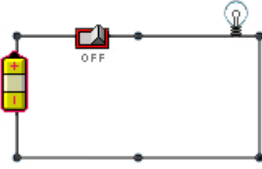
Question: What is the relationship between voltage, current, and resistance?

- Form hypothesis: How do you think increasing the resistance in a circuit will affect the current in the wire? _____
- Observe: Turn the light switch **On** to start the flow of current. An **ammeter** is a device that measures current in Amperes (A). Drag the **Ammeter** (A) to various parts of the circuit.
 - Is the current the same throughout, or does it change? _____
 - What is the current in the wire now? _____
- Collect data: Measure the current in the circuit using the resistor and voltage combinations given below.

Voltage	Resistance	Current
10 volts	10 ohms	
20 volts	10 ohms	
30 volts	10 ohms	

Voltage	Resistance	Current
50 volts	20 ohms	
50 volts	100 ohms	
50 volts	200 ohms	

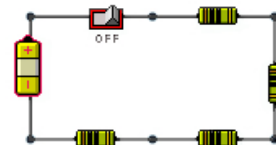
- Analyze: What is the mathematical relationship between voltage (V), resistance (R), and current (I)? Express your answer as an equation: _____
 This equation is known as **Ohm's law**.
- Test: Test your equation with other combinations of voltage and resistance. Modify the equation if necessary.
- Apply: Use Ohm's law to find the resistance of the light bulb in the Gizmo. What is it?



<p>Activity B: Series circuits</p>	<p><u>Get the Gizmo ready:</u></p> <ul style="list-style-type: none"> • Click Clear. • Create a circuit as shown. • Click the battery to select it. Set the Selected battery voltage to 10 volts. 	
--	--	---

Question: In a series circuit, there is only one path for charge to flow. What are the properties of series circuits?

1. Observe: Turn the light switch **ON** and observe the light bulb. Then start replacing the wire segments with new light bulbs.
 - A. How does each new light bulb affect the others? _____
 - B. Use the **Ammeter** to measure the current in various parts of the circuit. Is the current the same throughout, or does it change? _____
2. Form hypothesis: How do you think the total resistance of a series circuit is calculated?

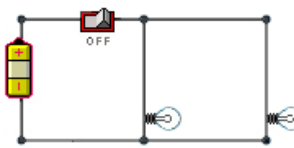
3. Experiment: Create a series circuit with a 10-volt battery and four 10-ohm resistors, as shown. Measure the current.



- A. Based on the voltage and current, what is the resistance of the circuit? (Hint: Use Ohm's law.) _____
 - B. **Ohmmeters** measure resistance. Remove the battery and attach the terminals of the **Ohmmeter** ( ) to the ends of the circuit. What is the resistance? _____
4. Make a rule: How do you calculate the total resistance of a series circuit? _____

Test your rule using the Gizmo. If necessary, modify your rule.

5. Extend your thinking: Replace the battery. Turn on **Show current**, and remove one resistor. Why would it be a problem if your household appliances were connected in a series circuit?

<p>Activity C: Parallel circuits</p>	<p><u>Get the Gizmo ready:</u></p> <ul style="list-style-type: none"> • Click Clear. • Create a circuit as shown. • Click the battery to select it. Set the Selected battery voltage to 15 volts. 	
--	--	---

Question: In a **parallel circuit**, there is more than one path along which charges can flow. What are the properties of parallel circuits?

1. Observe: Turn the light switch **ON** and observe the light bulb. Then add two more light bulbs to the circuit, parallel to the first two.

A. How does each new light bulb affect the others? _____

B. Use the **Ammeter** to measure the current in various parts of the circuit. Is the current the same throughout, or does it change? Explain: _____

2. Form hypothesis: How do you think the total resistance of a parallel circuit is calculated?

3. Experiment: With the battery voltage set to 15 volts, measure the current in a parallel circuit with 1, 2, 3, and 4 light bulbs. (In each case, place the ammeter next to the battery.) Use Ohm's law to calculate the total resistance of the circuit. Record results below.

Number of light bulbs	1	2	3	4
Voltage	15 volts	15 volts	15 volts	15 volts
Current				
Total resistance				

4. Make a rule: How would you find the resistance of a parallel circuit with n identical resistors?

5. Apply: What will be the total resistance and current in a parallel circuit with a 15-volt battery and three 10-ohm resistors? Test your answers with the Gizmo.

Total resistance: _____ Current: _____

(Activity C continued on next page)

Activity C (continued from previous page)

6. Extend your thinking: Household appliances are usually connected in a parallel circuit. Why do you think it might be a problem if too many appliances are turned on at once? (Hint: current in a wire also produces heat.)
-
-

7. Calculate: Determining the total resistance of a parallel circuit when there is a variety of resistors is more complex.

- The total current in the circuit (I) is equal to the sum of currents in each branch:

$$I = I_1 + I_2 + I_3$$

- Ohm's law ($V = IR$) can be rewritten as $I = V / R$. Substituting this expression into the equation above:

$$\frac{V}{R} = \frac{V}{R_1} + \frac{V}{R_2} + \frac{V}{R_3}$$

- (Note: Since each branch of the circuit might have a different resistance, we write R_1 , R_2 , and so forth. But the voltage is the same across each branch, so V is used for each term.)
- Divide each side of the equation by V , and you get an expression for the total resistance of the circuit:

$$\frac{1}{R} = \frac{1}{R_1} + \frac{1}{R_2} + \frac{1}{R_3}$$

8. Practice: Determine the total resistance of each of the following parallel circuits. Then use the Gizmo to check your answer. (You can calculate the total resistance from the current and voltage using Ohm's law, or use the **Ohmmeter** to measure the resistance directly.)

- A. A parallel circuit with a 20-ohm resistor and a 10-ohm resistor. _____
- B. A parallel circuit with two 20-ohm resistors and a 10-ohm resistor. _____
- C. A parallel circuit with a 15-ohm light bulb and a 20-ohm resistor. _____
- D. A parallel circuit with two 100-ohm resistors and a 20-ohm resistor. _____
- E. A parallel circuit with a 10-ohm, 20-ohm, 100-ohm and 200-ohm resistor. _____